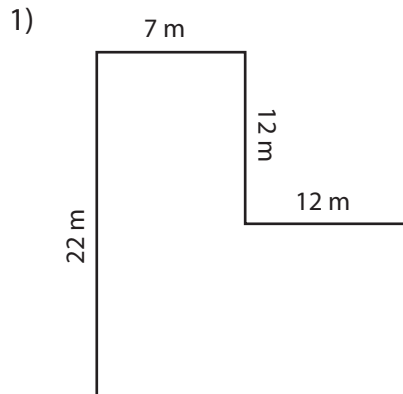
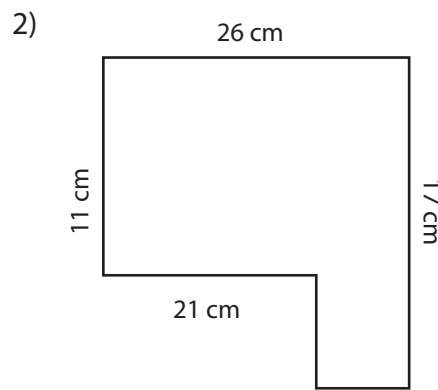


### Area and Perimeter of L Shapes

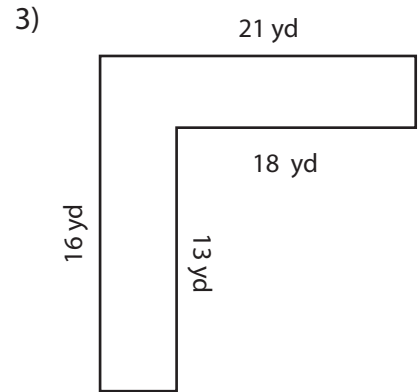
Find the area and perimeter of each shape.



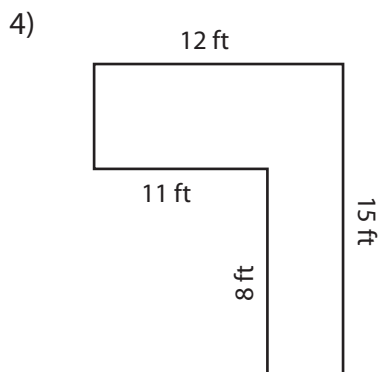
Area: \_\_\_\_\_  
Perimeter: \_\_\_\_\_



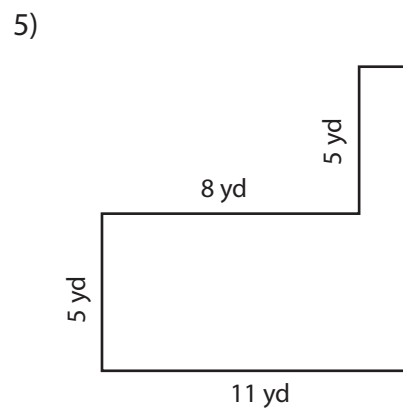
Area: \_\_\_\_\_  
Perimeter: \_\_\_\_\_



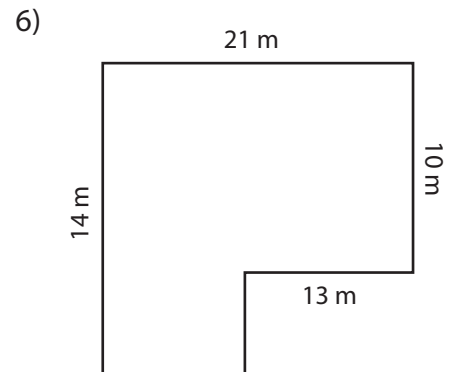
Area: \_\_\_\_\_  
Perimeter: \_\_\_\_\_



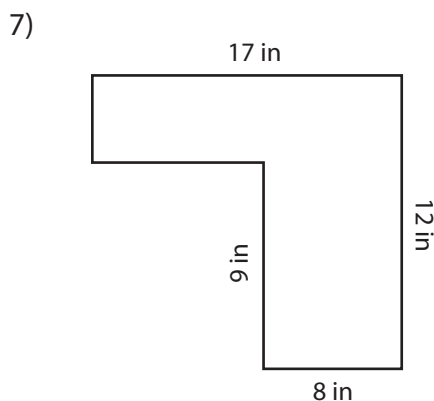
Area: \_\_\_\_\_  
Perimeter: \_\_\_\_\_



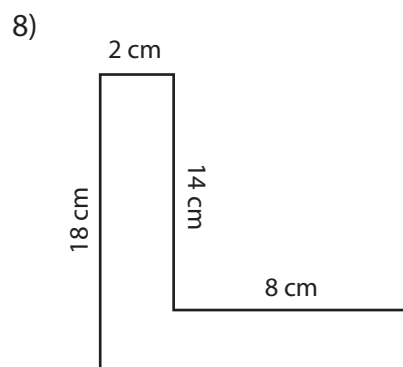
Area: \_\_\_\_\_  
Perimeter: \_\_\_\_\_



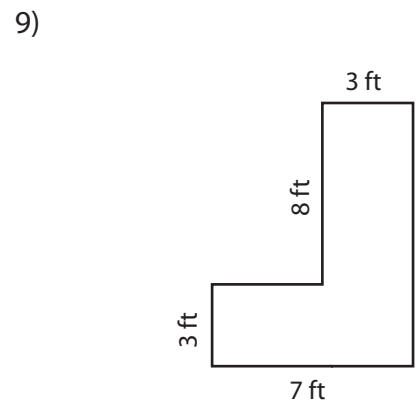
Area: \_\_\_\_\_  
Perimeter: \_\_\_\_\_



Area: \_\_\_\_\_  
Perimeter: \_\_\_\_\_



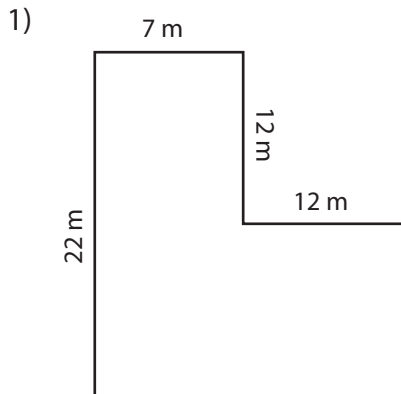
Area: \_\_\_\_\_  
Perimeter: \_\_\_\_\_



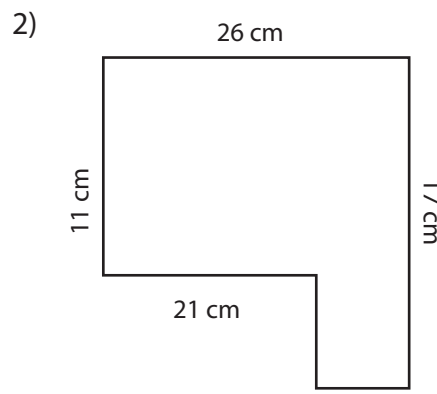
Area: \_\_\_\_\_  
Perimeter: \_\_\_\_\_

### Answer key

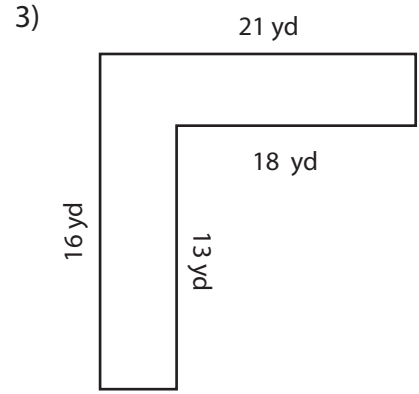
Find the area and perimeter of each shape.



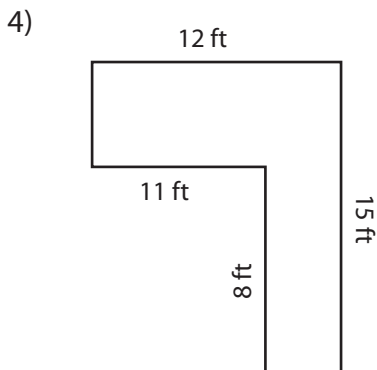
Area: 274 m<sup>2</sup>  
Perimeter: 82 m



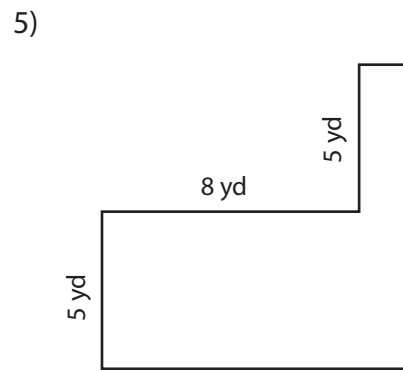
Area: 316 cm<sup>2</sup>  
Perimeter: 86 cm



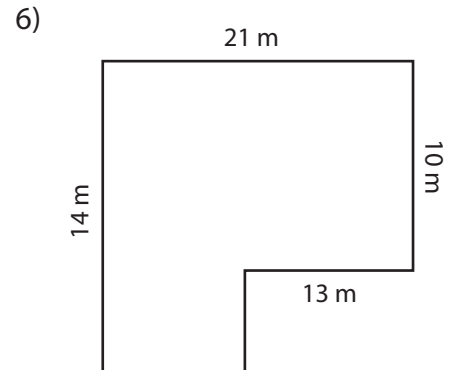
Area: 102 yd<sup>2</sup>  
Perimeter: 74 yd



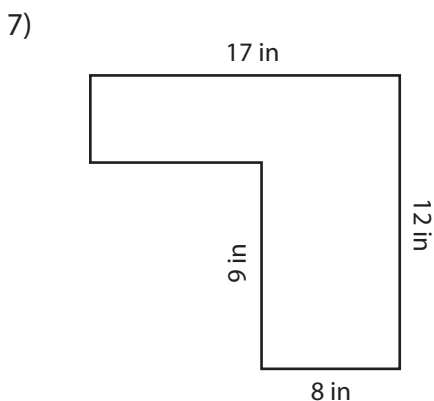
Area: 92 ft<sup>2</sup>  
Perimeter: 54 ft



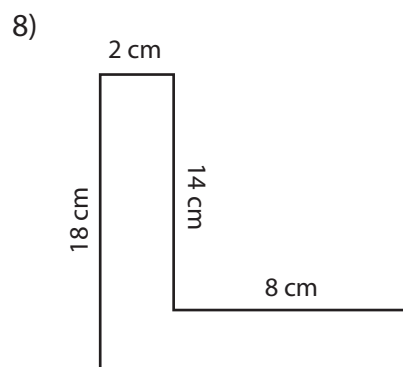
Area: 70 yd<sup>2</sup>  
Perimeter: 42 yd



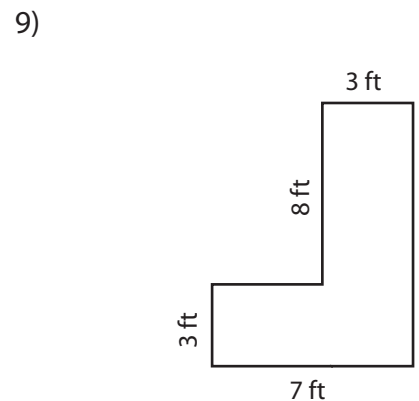
Area: 242 m<sup>2</sup>  
Perimeter: 70 m



Area: 123 in<sup>2</sup>  
Perimeter: 58 in



Area: 68 cm<sup>2</sup>  
Perimeter: 56 cm



Area: 45 ft<sup>2</sup>  
Perimeter: 36 ft